
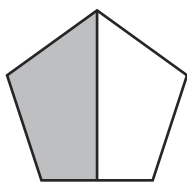
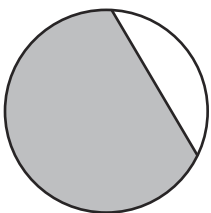
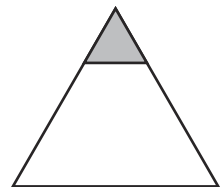
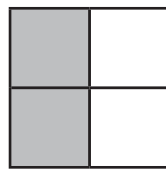
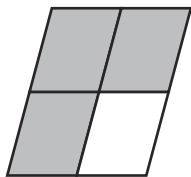



# Is It Half?

Can you sort these shapes into the correct column?

$\frac{1}{2}$	Not $\frac{1}{2}$



# Is It Half?

Can you sort these shapes into the correct column?

$\frac{1}{2}$	Not $\frac{1}{2}$
